


Date: _____

Name: _____

Measurement of Length Using Non-standard Unit

Use this Magic Wand to measure the objects:



Height of the giraffe: _____ wands



Length of the drums: _____ wands



Length of the mirror: _____ wands



Date: _____


Name: _____

Measurement of Length Using Non-standard Unit

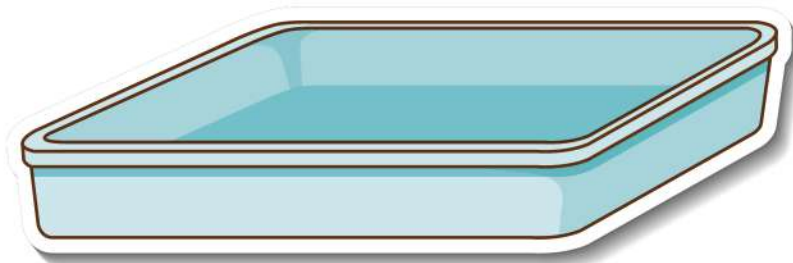
Use this Magic Wand to measure the objects:



Diameter of the basket: _____ wands



Length of the pizza slice: _____ wands



Length and breadth of the tub: _____ wands

