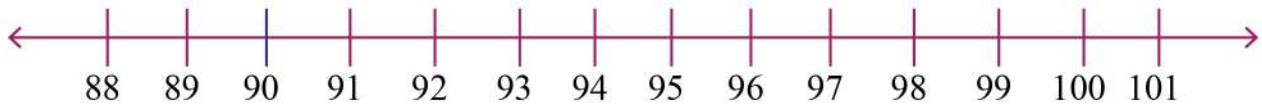


Name: _____

Comparing Numbers on Number Lines to 100



1. 88 is _____ than 90.

2. 85 is _____ than 89.

3. 90 is _____ than 85.

4. 89 is _____ than 91.

5. 96 is _____ 96.

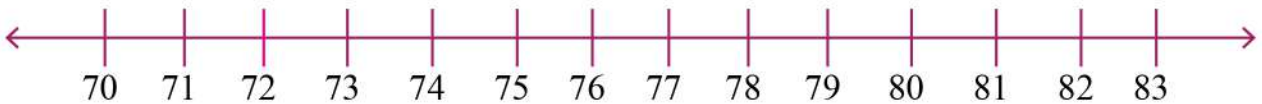
6. 97 is _____ than 95.

7. 95 is _____ than 98.

8. 90 is _____ than 91.

9. 99 is _____ than 93.

10. 96 is _____ than 92.



1. 72 is _____ than 81.

2. 71 is _____ than 72.

3. 74 is _____ than 78.

4. 76 is _____ than 75.

5. 77 is _____ than 75.

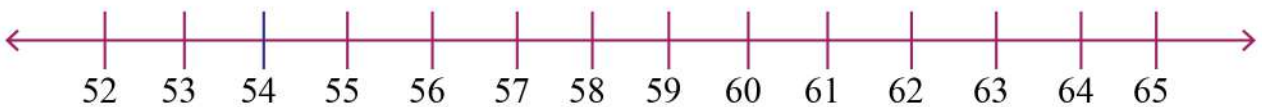
6. 77 is _____ than 70.

7. 75 is _____ than 81.

8. 70 is _____ than 82.

9. 79 is _____ than 73.

10. 76 is _____ than 74.



1. 58 is _____ than 53.

2. 62 is _____ than 61.

3. 59 is _____ than 57.

4. 62 is _____ than 55.

5. 64 is _____ than 63.

6. 59 is _____ than 63.

7. 58 is _____ than 54.

8. 59 is _____ 59.

9. 60 is _____ than 61.

10. 56 is _____ than 57.