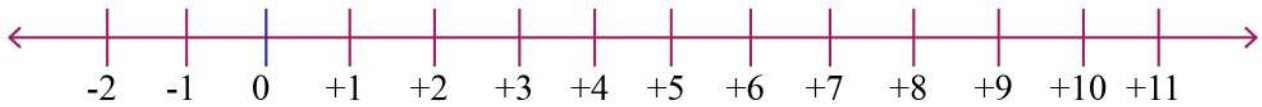


Name: _____

Comparing Numbers on Number Lines to 20



1. 8 is _____ than 3.

6. 7 is _____ than 3.

2. 5 is _____ than 4.

7. 5 is _____ than 7.

3. 10 is _____ than 11.

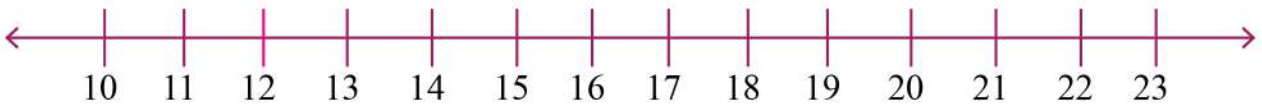
8. 10 is _____ than 9.

4. 9 is _____ than 10.

9. 9 is _____ than 1.

5. 6 is _____ than 5.

10. 6 is _____ than 8.



1. 10 is _____ than 11.

6. 17 is _____ than 13.

2. 5 is _____ than 12.

7. 15 is _____ than 17.

3. 10 is _____ than 18.

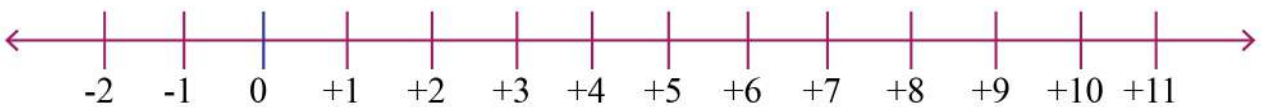
8. 10 is _____ than 19.

4. 9 is _____ than 15.

9. 19 is _____ than 15.

5. 18 is _____ than 5.

10. 16 is _____ than 18.



1. 7 is _____ than 3.

6. 8 is _____ than 3.

2. 5 is _____ than 11.

7. 5 is _____ than 11.

3. 10 is _____ than 7.

8. 10 is _____ than 11.

4. 9 is _____ than 5.

9. 9 is _____ than 11.

5. 6 is _____ than 3.

10. 6 is _____ than 9.