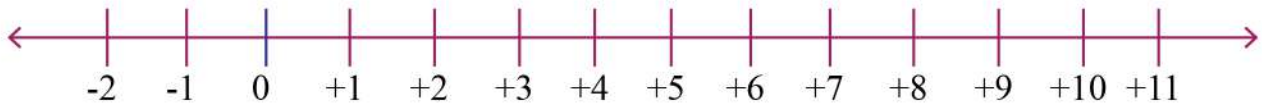


Name: _____

Comparing Numbers on Number Lines to 50



1. 8 is _____ than 5.

6. 5 is _____ than 4.

2. 5 is _____ than 6.

7. 8 is _____ than 2.

3. 10 is _____ than 9.

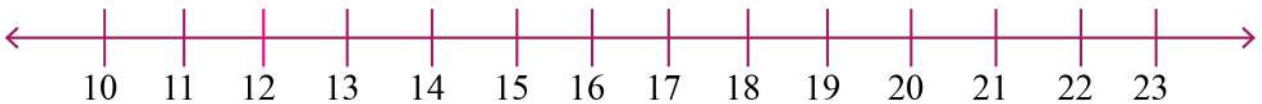
8. 9 is _____ than 5.

4. 9 is _____ than 11.

9. 7 is _____ than 2.

5. 6 is _____ than 8.

10. 7 is _____ than 3.



1. 10 is _____ than 12.

6. 17 is _____ than 18.

2. 15 is _____ than 12.

7. 20 is _____ than 17.

3. 10 is _____ than 22.

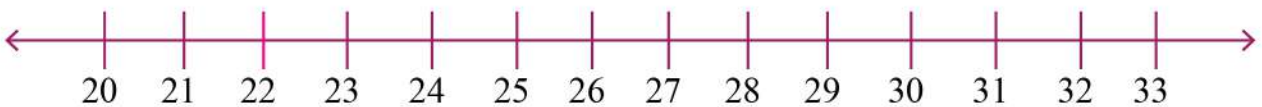
8. 20 is _____ than 19.

4. 9 is _____ than 23.

9. 18 is _____ than 15.

5. 18 is _____ than 21.

10. 16 is _____ than 19.



1. 27 is _____ than 23.

6. 28 is _____ than 23.

2. 25 is _____ than 21.

7. 25 is _____ than 31.

3. 20 is _____ than 27.

8. 30 is _____ than 21.

4. 29 is _____ than 25.

9. 29 is _____ than 33.

5. 26 is _____ than 23.

10. 26 is _____ than 29.