


Date: _____

Name: _____


Measure the Length with a Metric Ruler in Millimeters



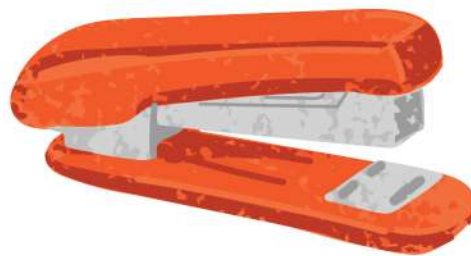
Length of the Screw: _____ Millimeters



Length of the Hotdog: _____ Millimeters



Height of the glass: _____ Millimeters



Length of the Stapler: _____ Millimeters

Please cut the scales and measure the lengths given above.

