


# Identify Quadrilateral Shape



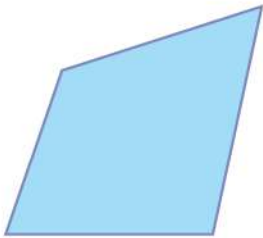
Here are some quadrilateral shapes on the worksheet. Can you identify them?

1.



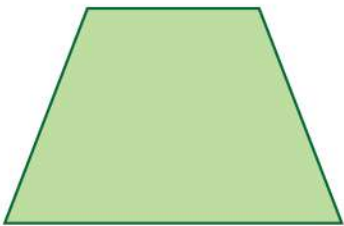
Square

2.




\_\_\_\_\_

3.



\_\_\_\_\_

4.



\_\_\_\_\_

5.




\_\_\_\_\_

6.



\_\_\_\_\_

7.



\_\_\_\_\_

8.



\_\_\_\_\_

