


# Identify Quadrilateral Shape


Here are some quadrilateral shapes on the worksheet. Can you identify them?

1.




\_\_\_\_\_

2.



\_\_\_\_\_

3.



\_\_\_\_\_

4.



\_\_\_\_\_

5.



\_\_\_\_\_

6.



\_\_\_\_\_

7.



\_\_\_\_\_

8.



\_\_\_\_\_

