




## Identify 2D Shapes and Solve Multiple Choices



Here are some 2D shapes on the worksheet. Can you identify and solve multiple choices?

1.



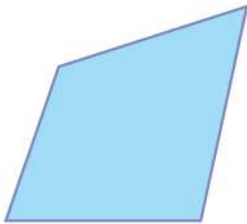
- Square
- Triangle
- Circle

5.



- Rectangle
- Octagon
- Pentagon

2.



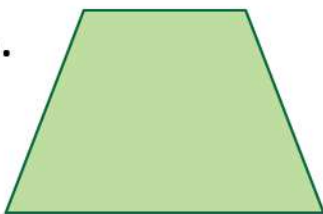
- Square
- Quadrilateral
- Oval

6.




- Kite
- Triangle
- Pentagon

3.




- Trapezoid
- Triangle
- Octagon

7.



- Square
- Parallelogram
- Circle

4.



- Square
- Triangle
- Parallelogram

8.



- Square
- Rhombus
- Circle

