




Write Number of Sides and Names of Given 2D Shapes

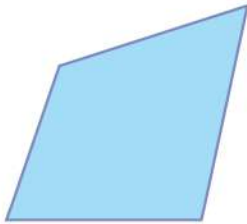


Here are some 2D shapes on the worksheet. Can you write number of sides and names of given 2D shapes?

1.

Name : SquareNumber of sides : 4

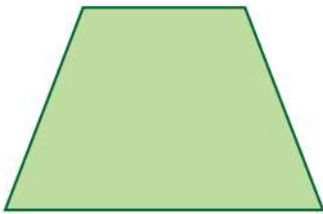
2.



Name : _____

Number of sides : _____


3.



Name : _____

Number of sides : _____

4.



Name : _____

Number of sides : _____

5.



Name : _____

Number of sides : _____


6.



Name : _____

Number of sides : _____

7.



Name : _____

Number of sides : _____

8.



Name : _____

Number of sides : _____

