

Name : \_\_\_\_\_







Date : \_\_\_\_\_



## Identify and Choose Correct 3D Shape Name



Here are some 3D shapes on the worksheet. Can you identify and choose correct 3D shape name?

	✓ CONE	SPHERE	SQUARE PYRAMID
	OCTAHONAL PRISM	RECTANGULAR PRISM	ELIPSOID
	CUBE	DODECAHEDRON	SQUARE PYRAMID
	DODECAHEDRON	SPHERE	PENTAGONAL PRISM
	OCTAHONAL PRISM	ELIPSOID	CUBE
	SPHERE	PENTAGONAL PRISM	CONE

