

Name : _____







Date : _____



Identify and Choose Correct 3D Shape Name



Here are some 3D shapes on the worksheet. Can you identify and choose correct 3D shape name?

| | | | |
|---|-----------------|------------------|-------------------|
|  | CONE | SPHERE | TETRAHEDRON |
|  | CUBE | DODECAHEDRON | SQUARE PYRAMID |
|  | OCTAHONAL PRISM | ELIPSOID | CUBE |
|  | CYLINDER | OCTAHONAL PRISM | RECTANGULAR PRISM |
|  | CTAHONAL PRISM | TRIANGULAR PRISM | SQUARE PYRAMID |
|  | OCTAHONAL PRISM | ELIPSOID | HEXAGONAL PYRAMID |

