

Name : _____


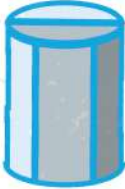


Date : _____





Finding Properties of 3D Shapes




Here are some 3D shapes on the worksheet. Can you find the properties of 3D shapes and their examples?

Shapes	Faces	Edges	Vertices
	6	12	8
	3	2	0
	4	12	8
	1	1	0



Name : _____



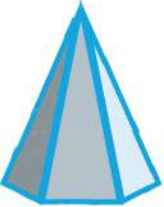
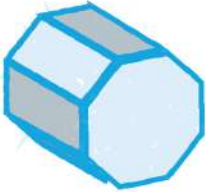
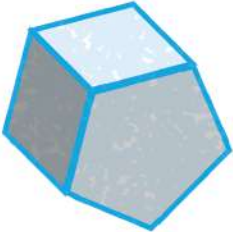
Date : _____





Finding Properties of 3D Shapes



Here are some 3D shapes on the worksheet. Can you find the properties of 3D shapes and their examples?

Shapes	Faces	Edges	Vertices
	5	8	5
	2	1	1
	7	12	7
	14	24	16
	7	15	10



Name : _____

Date : _____



Finding Properties of 3D Shapes

Here are some 3D shapes on the worksheet. Can you find the properties of 3D shapes and their examples?




Shape Name :
Faces :
Edges :
Vertices :



Shape Name :
Faces :
Edges :
Vertices :



Shape Name :
Faces :
Edges :
Vertices :



Shape Name :
Faces :
Edges :
Vertices :



Shape Name :
Faces :
Edges :
Vertices :



Shape Name :
Faces :
Edges :
Vertices :



Shape Name :
Faces :
Edges :
Vertices :



Shape Name :
Faces :
Edges :
Vertices :



Shape Name :
Faces :
Edges :
Vertices :

