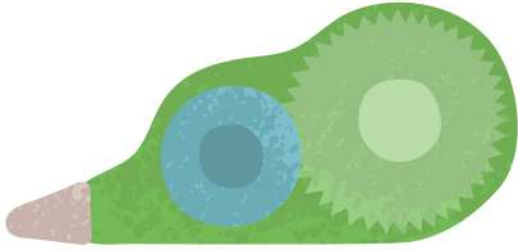


Date: _____

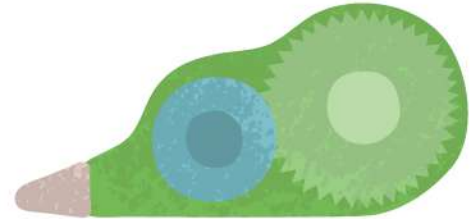
Name: _____

Measure the Lengths & Use Symbols to Compare

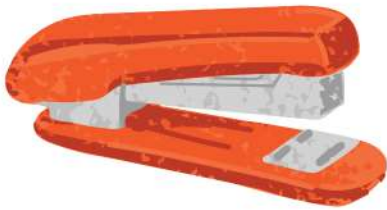
Write down the lengths and compare with $>$, $<$, $=$ symbols



Length: _____



Length: _____



Length: _____



Length: _____



Length: _____



Length: _____

