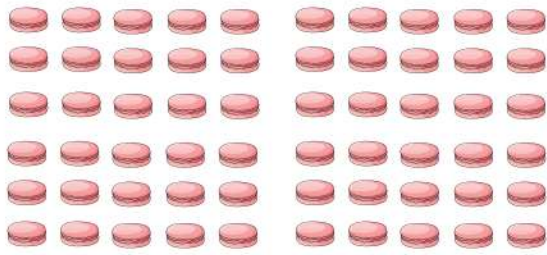



Name: \_\_\_\_\_



## Counting and Comparing Numbers to 50



How many  ? \_\_\_\_\_




How many  ? \_\_\_\_\_



Which one is more?    



How many  ? \_\_\_\_\_




How many  ? \_\_\_\_\_

Which one is less?    



How many  ? \_\_\_\_\_



How many  ? \_\_\_\_\_

Which one is more?    