




Name: _____

Worksheet for Domino Addition


Count the dots in domino and write the numbers to complete the domino addition.




$$\textcircled{5} + \textcircled{2} = \textcircled{7}$$



$$\textcircled{\quad} + \textcircled{\quad} = \textcircled{\quad}$$



$$\textcircled{\quad} + \textcircled{\quad} = \textcircled{\quad}$$



$$\textcircled{\quad} + \textcircled{\quad} = \textcircled{\quad}$$




$$\textcircled{\quad} + \textcircled{\quad} = \textcircled{\quad}$$



$$\textcircled{\quad} + \textcircled{\quad} = \textcircled{\quad}$$



$$\textcircled{\quad} + \textcircled{\quad} = \textcircled{\quad}$$



$$\textcircled{\quad} + \textcircled{\quad} = \textcircled{\quad}$$

