





Name: \_\_\_\_\_

# Worksheet for Domino Addition

Count the dots in domino and write the numbers to complete the domino addition.



$$\bigcirc + \bigcirc = \bigcirc$$



$$\bigcirc + \bigcirc = \bigcirc$$




$$\bigcirc + \bigcirc = \bigcirc$$



$$\bigcirc + \bigcirc = \bigcirc$$




$$\bigcirc + \bigcirc = \bigcirc$$



$$\bigcirc + \bigcirc = \bigcirc$$



$$\bigcirc + \bigcirc = \bigcirc$$



$$\bigcirc + \bigcirc = \bigcirc$$

