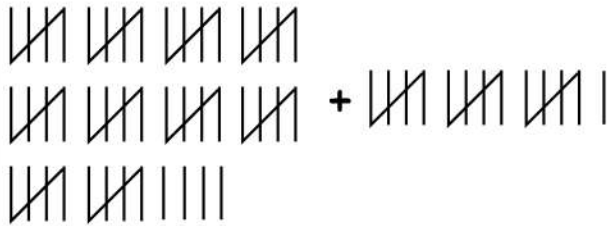



## Filling the Blanks by Counting Tally Marks

Fill the blanks of these addition and subtraction problems after counting the tally marks.

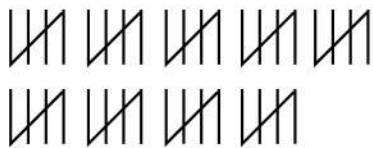
$$54 + \underline{\hspace{2cm}} = 70$$



$$90 - \underline{\hspace{2cm}} = 55$$



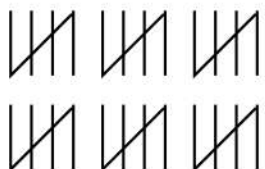
$$45 + \underline{\hspace{2cm}} = 63$$



$$19 + \underline{\hspace{2cm}} = 40$$



$$30 + \underline{\hspace{2cm}} = 50$$



$$25 - \underline{\hspace{2cm}} = 10$$

