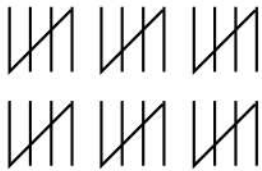


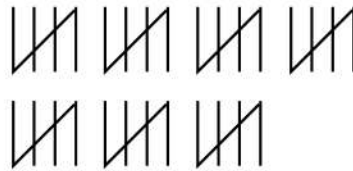
## Filling the Blanks by Counting Tally Marks

Fill the blanks of these addition and subtraction problems after counting the tally marks.

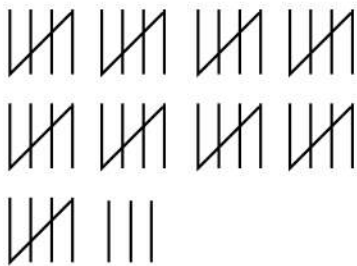
$$60 - \underline{\hspace{2cm}} = 44$$



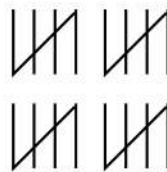
$$65 - \underline{\hspace{2cm}} = 40$$



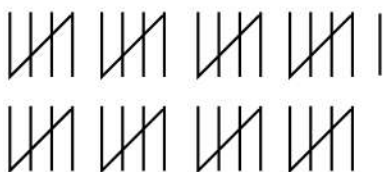
$$88 + \underline{\hspace{2cm}} = 95$$



$$40 + \underline{\hspace{2cm}} = 67$$



$$81 - \underline{\hspace{2cm}} = 56$$



$$29 + \underline{\hspace{2cm}} = 50$$

