

Name : \_\_\_\_\_

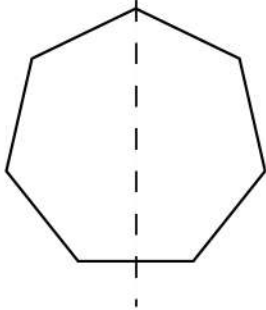
Date : \_\_\_\_\_



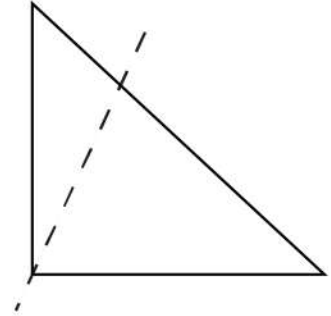
# Find Line of Symmetry of Given Shape



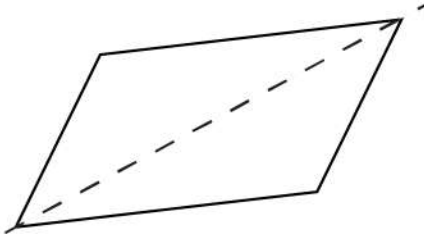
Here are some shapes on the worksheet. Is the dotted line on each shape a line of symmetry? Write yes or no.



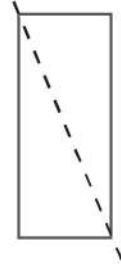
\_\_\_\_\_



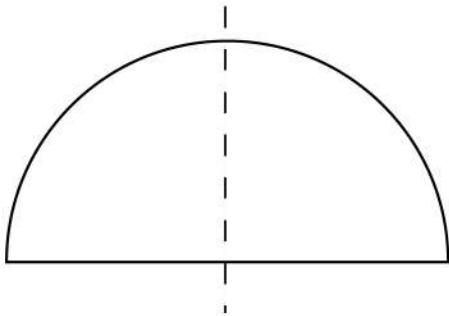
\_\_\_\_\_



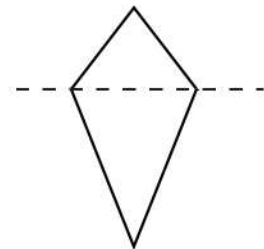
\_\_\_\_\_



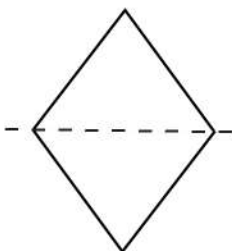
\_\_\_\_\_



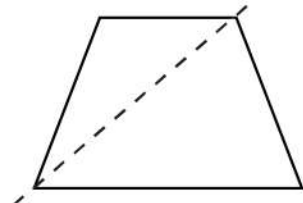
\_\_\_\_\_



\_\_\_\_\_



\_\_\_\_\_



\_\_\_\_\_

