

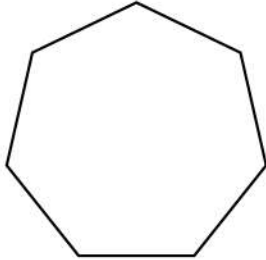
Name : \_\_\_\_\_

Date : \_\_\_\_\_

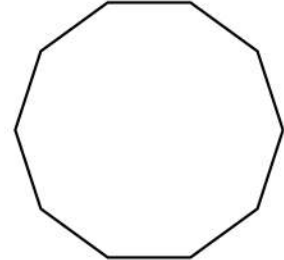
# Draw and Count Line of Symmetry of Given Shape



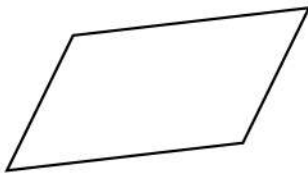
Here are some shapes on the worksheet. Can you draw and count line of symmetry of given shape?



\_\_\_\_\_



\_\_\_\_\_



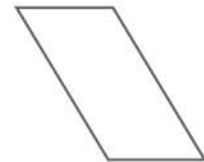
\_\_\_\_\_



\_\_\_\_\_



\_\_\_\_\_



\_\_\_\_\_



\_\_\_\_\_



\_\_\_\_\_

