




# Identify Correct 2D Shapes without Hint



Here are some 2D shapes on the worksheet. Can you identify correct 2D shapes without hint?

1.



Pentagon

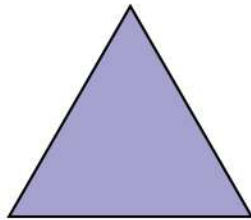
---

5.



---

2.



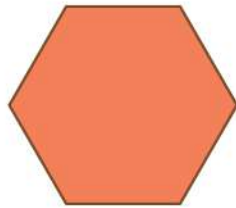
---

6.



---

3.



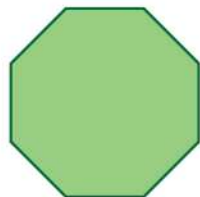
---

7.



---

4.



---

8.



---

