




Identify Correct 2D Shapes without Hint

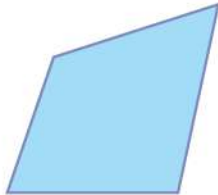


Here are some 2D shapes on the worksheet. Can you identify correct 2D shapes without hint?

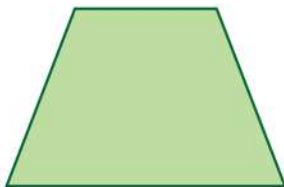
1.




2.




3.



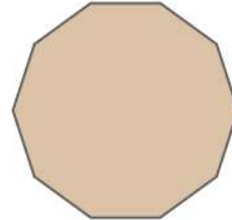
4.



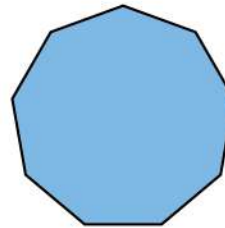
5.



6.



7.



8.

