

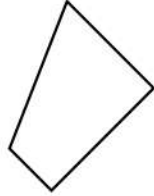
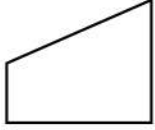


Complete Patterns by Rotating 2D Shapes

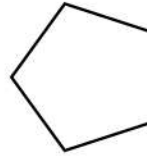
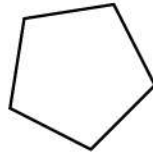
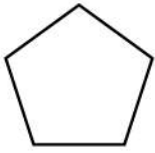


Here are some 2D shapes on the worksheet. Can you complete patterns by rotating 2D shapes?

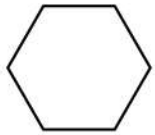
1.



2.



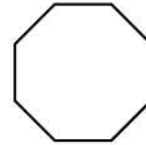
3.



4.



5.



6.



7.



8.

