

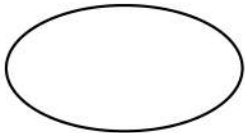
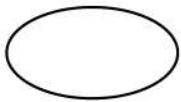


Name : \_\_\_\_\_

Date : \_\_\_\_\_

## Scaling and Drawing Square, Oval, and Diamond



Here are some 2D shapes on the worksheet. Can you scale and draw 3 more squares, ovals, and diamonds by making the first shape bigger or smaller?



Draw another scaled and rotated version of an oval shape now.

Solve :

