

Name : _____

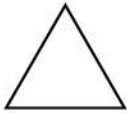
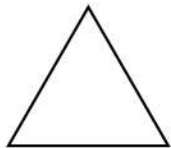
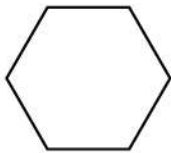

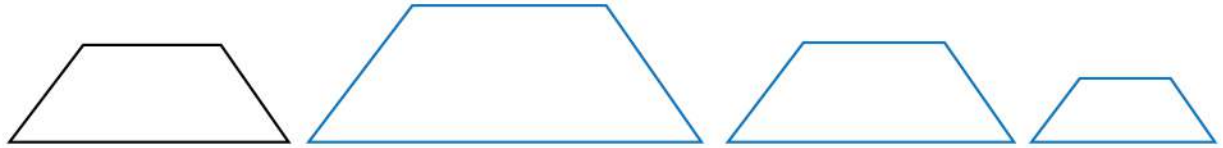
Date : _____



Scaling and Drawing Triangle, Hexagon, and Trapezoid



Here are some 2D shapes on the worksheet. Can you scale and draw 3 more triangles, hexagons, and trapezoids by making the first shape bigger or smaller?



Draw a square. Then draw three squares that are smaller or bigger than the first one. Color the bigger one red and smaller one blue.

Solve :

