

Name: _____


Worksheet for Filling the Gaps by Drawing Tally Marks



$5 + \underline{\quad} = 10$



$3 + \underline{\quad} = 9$



$4 + \underline{\quad} = 8$




$6 + \underline{\quad} = 10$



$7 + \underline{\quad} = 9$




$1 + \underline{\quad} = 6$



$9 + \underline{\quad} = 10$



$8 + \underline{\quad} = 10$



$2 + \underline{\quad} = 6$



$5 + \underline{\quad} = 9$