

Name: _____

Addition and Subtraction Facts to 10 with Blocks

Complete these number blocks with the help of addition and subtraction facts to 10



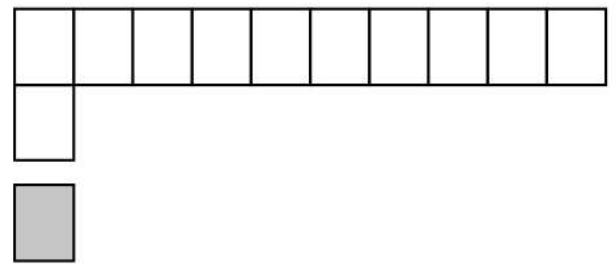
$$\square + \square = 10$$



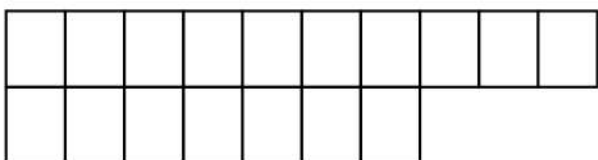
$$\square + \square = 10$$



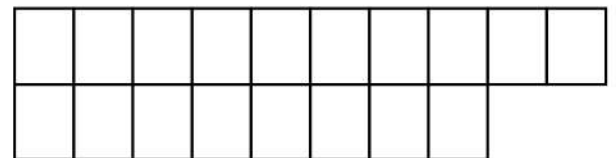
$$\square + \square = 10$$



$$\square + \square = 10$$



$$\square - \square = 10$$



$$\square - \square = 10$$

