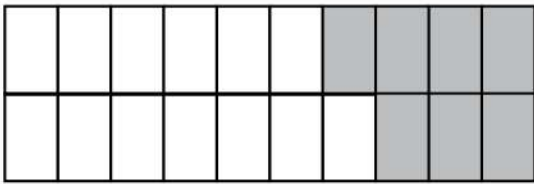


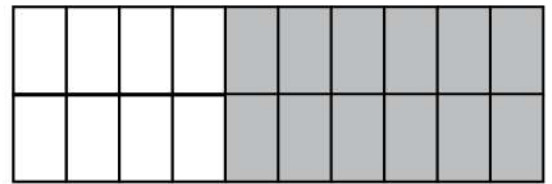
Name: _____

Addition and Subtraction Facts to 20 with Blocks

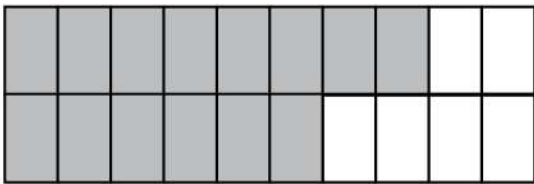
Complete these number blocks with the help of addition and subtraction facts to 10



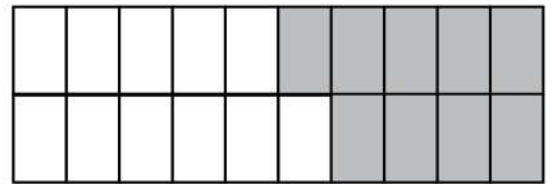
$$\square + \square = 20$$



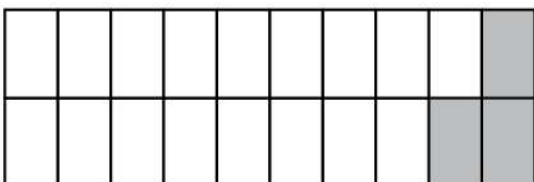
$$\square + \square = 20$$



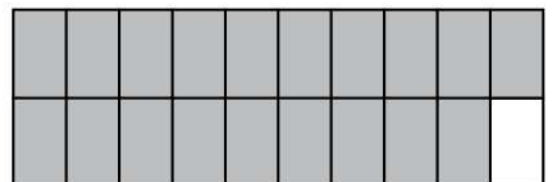
$$\square + \square = 20$$



$$\square + \square = 20$$



$$\square + \square = 20$$



$$\square + \square = 20$$

