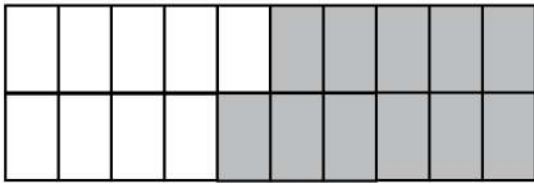


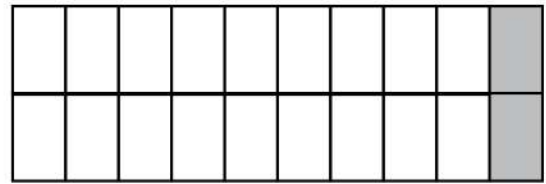
Name: \_\_\_\_\_

## Addition and Subtraction Facts to 20 with Blocks

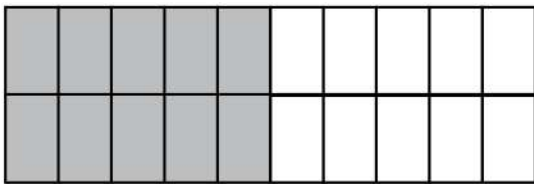
Complete these number blocks with the help of addition and subtraction facts to 10



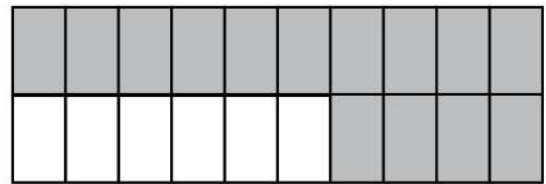
$$\square + \square = 20$$



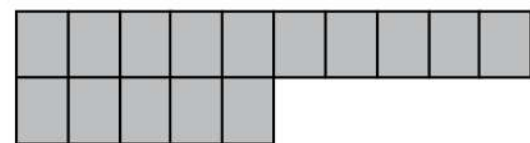

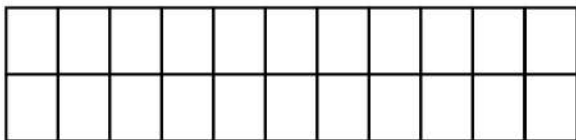
$$\square + \square = 20$$



$$\square + \square = 20$$



$$\square + \square = 20$$



$$\square - \square = 20$$

$$\square - \square = 20$$