

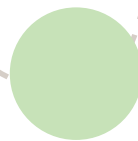
# Worksheet for Searching Cheese by Counting Backwards from 100



30



27




25



25



22




20



20



18




15



18



16



13

