







Name: _____

Bar Graphs and Pictograph

Look at the bar graph to determine how many of each variety of flower there are, then create a pictograph.



Types of Flower	Number of Flowers
	<input type="text"/>
	<input type="text"/>
	<input type="text"/>
	<input type="text"/>
	<input type="text"/>

Make pictograph with . Each  has a value of one.

