






Finding Missing Tally Marks from Patterns

1) , , , , _____, 

2) , , , , _____, 

3) , , , _____, , 

4) , , , , _____, 

5) , , , , _____, 

6) , , , , _____, 