


Name _____

Date _____



Worksheet on Multiple Choice Questions for Counting Quarters

Count the quarters and fill in the box next to the correct answer.




25¢ 50¢ 75¢




\$1 \$1.25 \$1.5



\$1 \$1.25 \$1.5



25¢ 50¢ 75¢



25¢ 50¢ 75¢



\$1 \$1.25 \$1.5

