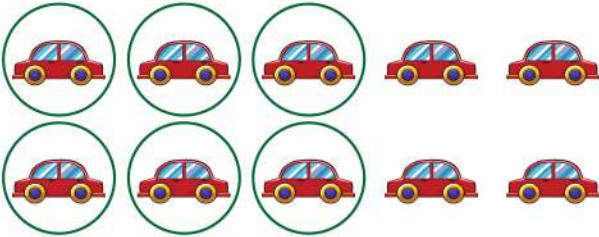


Date: _____


Name: _____

Circling Correct Number of Objects Using Given Numbers

Circle 6 cars.




Circle 8 flowers.



Circle 5 balls.



Circle 3 ice-creams.



Circle 10 candles.



Circle 4 tomatoes.

