

Date: _____

Name: _____

Circling Correct Number of Objects Using Given Numbers


Circle 5 ice-creams.




Circle 4 balls.




Circle 2 cars.



Circle 7 tomatoes.



Circle 9 flowers.



Circle 6 candles.

