


Date: \_\_\_\_\_

Name: \_\_\_\_\_

# Finding How Many Objects Are Given After Counting to 10 Worksheet


How many? \_\_\_\_\_



How many? \_\_\_\_\_




How many? \_\_\_\_\_



How many? \_\_\_\_\_



How many? \_\_\_\_\_



How many? \_\_\_\_\_

