


Date: _____

Name: _____

Counting Objects to 10 and Comparing Two Groups Worksheet



How many  ? _____



How many  ? _____

Which of these are more?  




How many  ? _____



How many  ? _____

Which of these are more?  



How many  ? _____




How many  ? _____

Which of these are more?  



How many  ? _____



How many  ? _____

Which of these are more?  