

Date: _____

Name: _____

Counting and Comparing Groups of Objects Worksheets



How many ? _____

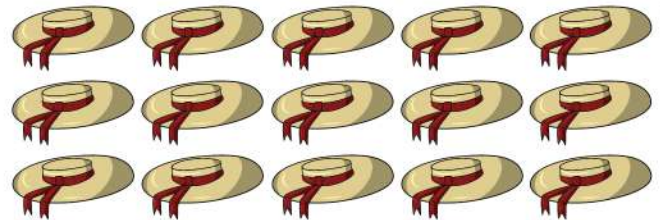


How many ? _____

Which of these are more?  



How many ? _____

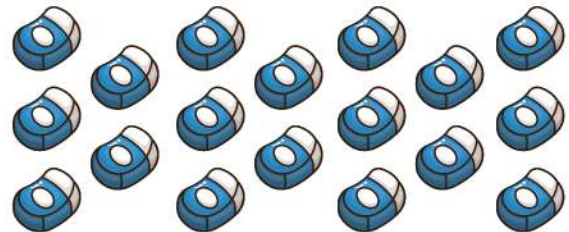


How many ? _____

Which of these are more?  

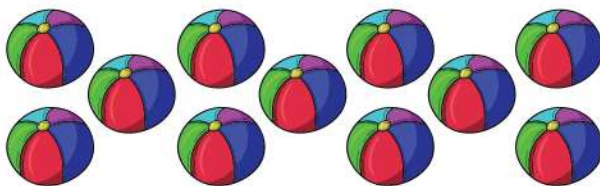


How many ? _____



How many ? _____

Which of these are more?  



How many ? _____



How many ? _____

Which of these are more?  