

Name: _____

Subtracting Money


Subtract the Canadian coins and bills and write the value.





 -  = \$ 28

 -  = \$ _____

 -  = \$ _____

 -  = \$ _____

 -  = \$ _____

 -  = \$ _____

