

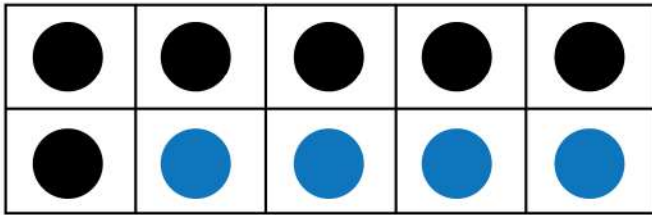
Date :

Name :

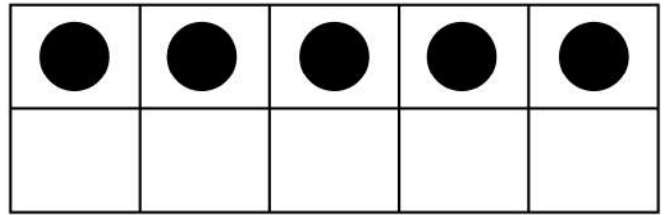


## Counting and Finding Missing Addends Using Ten Frames

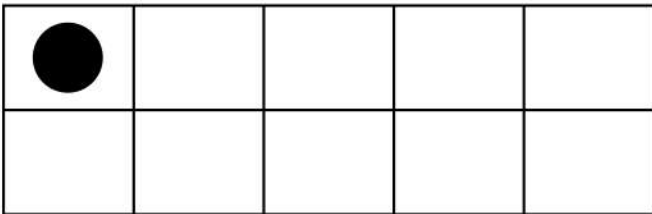
Draw the missing counters.




$$6 + \underline{4} = 10$$



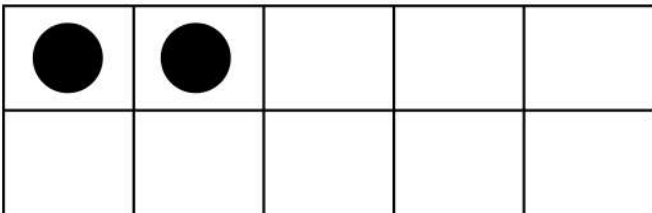
$$5 + \underline{\quad} = 10$$




$$1 + \underline{\quad} = 10$$



$$7 + \underline{\quad} = 10$$



$$2 + \underline{\quad} = 10$$



$$8 + \underline{\quad} = 10$$

