

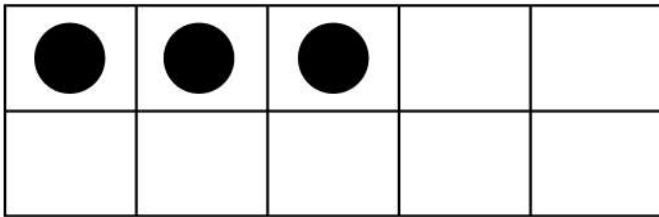
Date :

Name :




Counting and Finding Missing Addends Using Ten Frames

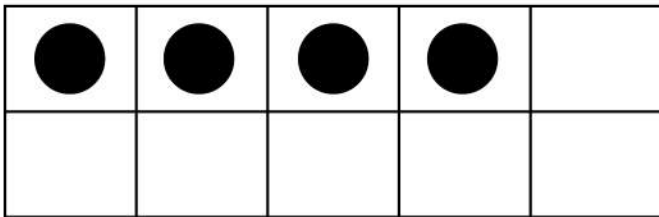
Draw the missing counters.




$$3 + \underline{\quad} = 10$$



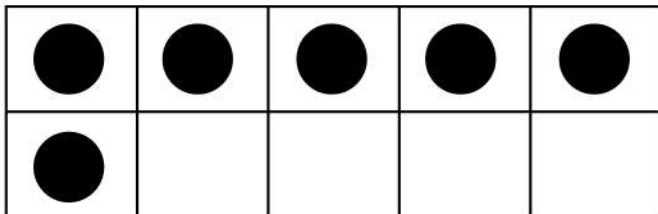
$$9 + \underline{\quad} = 10$$



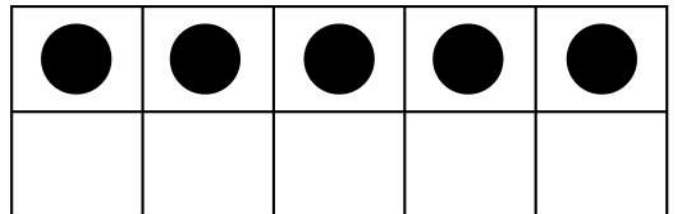
$$4 + \underline{\quad} = 10$$



$$\underline{\quad} + 10 = 10$$



$$\underline{\quad} + 6 = 10$$



$$\underline{\quad} + 5 = 10$$

