

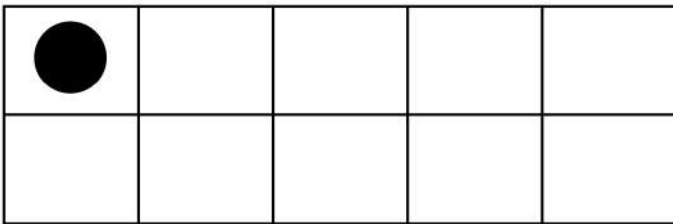
Date :

Name :

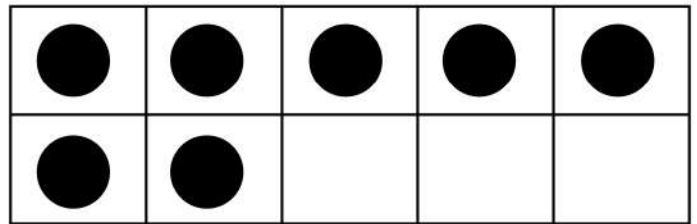


Counting and Finding Missing Addends Using Ten Frames

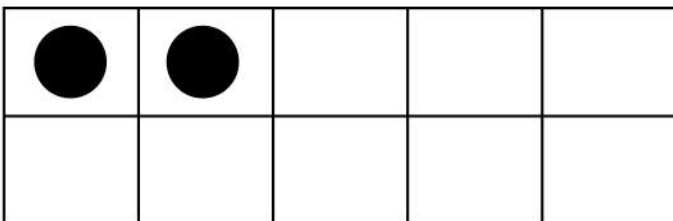
Draw the missing counters.




$$\underline{\quad} + 1 = 10$$



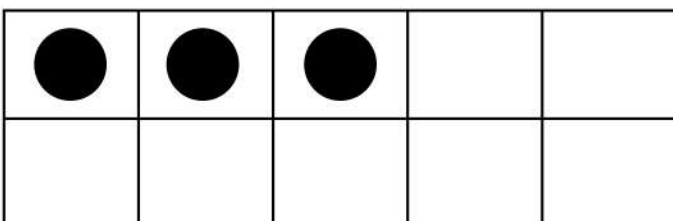
$$\underline{\quad} + 7 = 10$$




$$\underline{\quad} + 2 = 10$$



$$\underline{\quad} + 8 = 10$$



$$\underline{\quad} + 3 = 10$$



$$\underline{\quad} + 9 = 10$$

