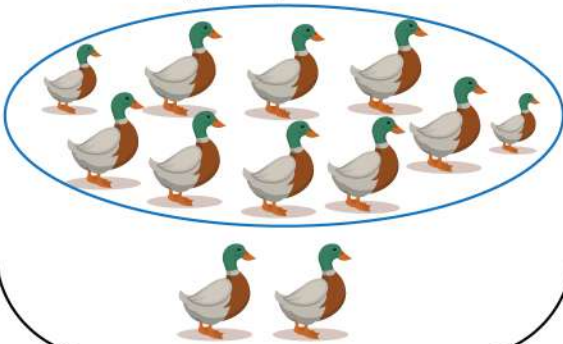




## Filling the Blanks Using Grouping in Tens Worksheet

Circle the groups of 10 and write the number.


There are 12 elements  
in the group below.




There are \_\_\_ elements  
in the group below.



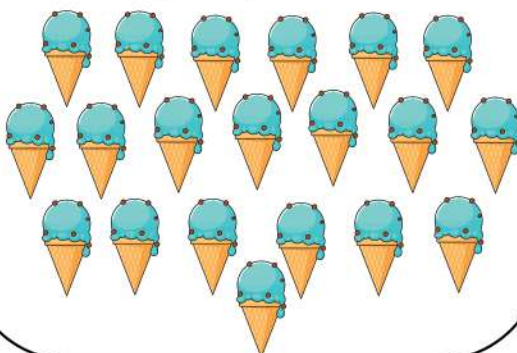
There are \_\_\_ elements  
in the group below.



There are \_\_\_ elements  
in the group below.



There are \_\_\_ elements  
in the group below.



There are \_\_\_ elements  
in the group below.

