




Filling the Blanks Using Grouping in Tens Worksheet

Circle the groups of 10 and write the number.


There are ___ elements
in the group below.




There are ___ elements
in the group below.



There are ___ elements
in the group below.



There are ___ elements
in the group below.



There are ___ elements
in the group below.



There are ___ elements
in the group below.

