

Name: \_\_\_\_\_

# Coins in Piggy Bank




Identify and count the Canadian Coins in each piggy bank and write the amount.



1. Total: \_\_\_\_\_




2. Total: \_\_\_\_\_




3. Total: \_\_\_\_\_



4. Total: \_\_\_\_\_



5. Total: \_\_\_\_\_



6. Total: \_\_\_\_\_

