


Date :

Name :



Choosing Correct Summation with Regrouping Tens and Ones

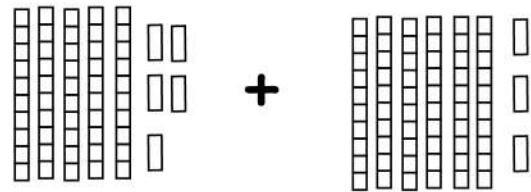


$$24 + 17 = \underline{41}$$

41

45

57

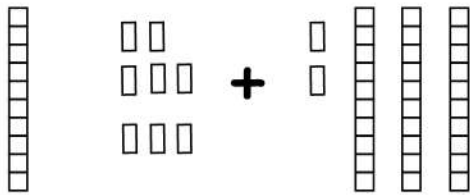


$$45 + 63 = \underline{\quad}$$

14

65

108

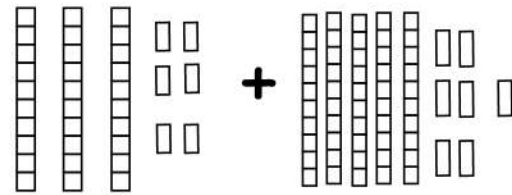


$$18 + 32 = \underline{\quad}$$

50

33

78

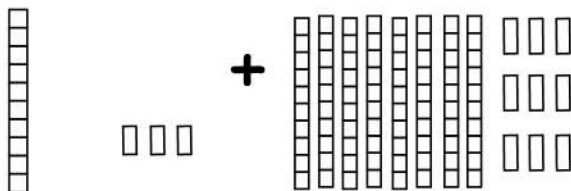


$$36 + 57 = \underline{\quad}$$

41

93

57

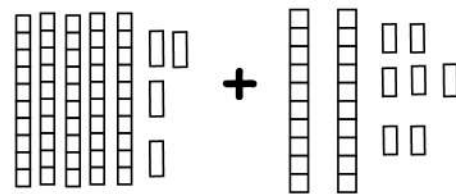


$$13 + 89 = \underline{\quad}$$

19

45

102



$$54 + 27 = \underline{\quad}$$

81

45

28

