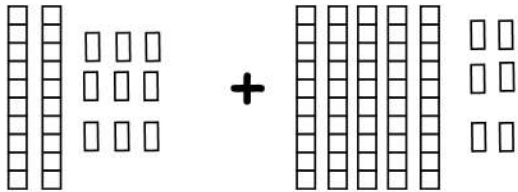


Date :

Name :

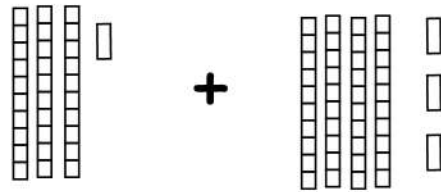


## Choosing Correct Summation with Regrouping Tens and Ones



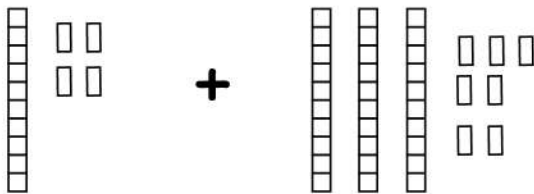
$$29 + 56 = \underline{\quad}$$

41      85      57  
           



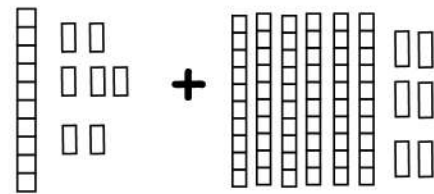
$$41 + 25 = \underline{\quad}$$

66      65      48  
           



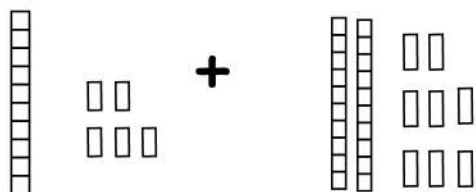
$$14 + 37 = \underline{\quad}$$

51      33      78  
           



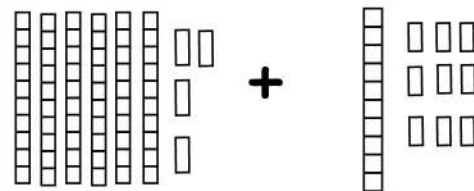
$$39 + 52 = \underline{\quad}$$

91      93      85  
           



$$15 + 28 = \underline{\quad}$$

19      45      43  
           



$$64 + 19 = \underline{\quad}$$

83      73      28  
           

