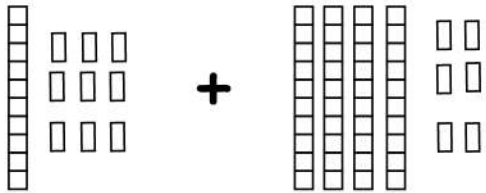


Date :

Name :



Choosing Correct Summation with Regrouping Tens and Ones

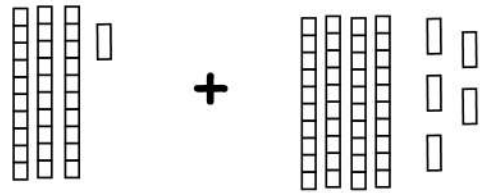


$$19 + 46 = \underline{\quad}$$

41

65

57

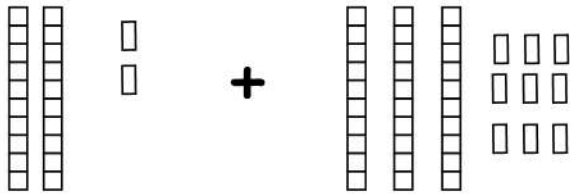


$$31 + 45 = \underline{\quad}$$

76

65

48

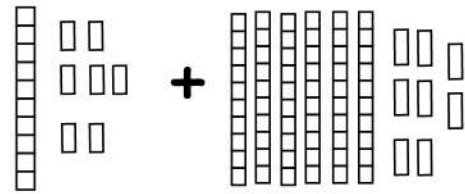


$$22 + 39 = \underline{\quad}$$

61

33

78

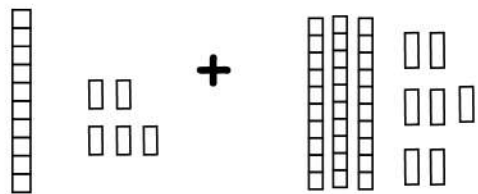


$$17 + 68 = \underline{\quad}$$

41

93

85

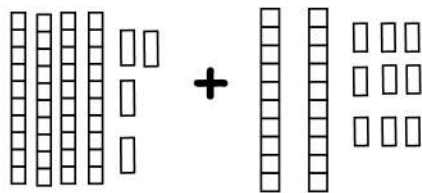


$$15 + 37 = \underline{\quad}$$

19

45

57



$$44 + 29 = \underline{\quad}$$

81

73

28

