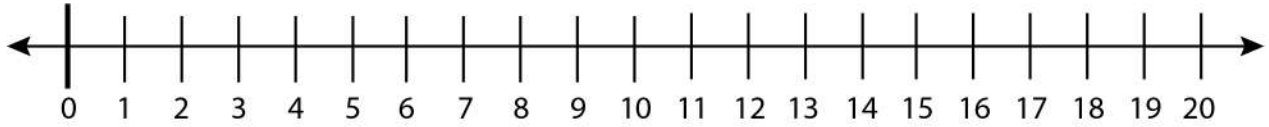


Date: _____

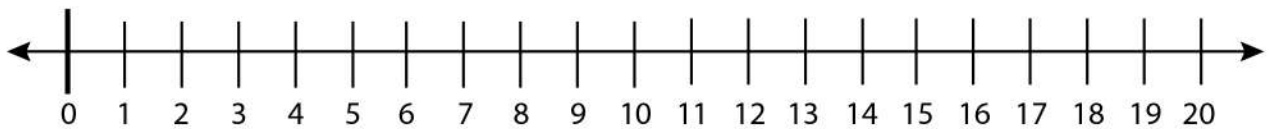
Name: _____

Recognizing a Number on a Number Line to 20

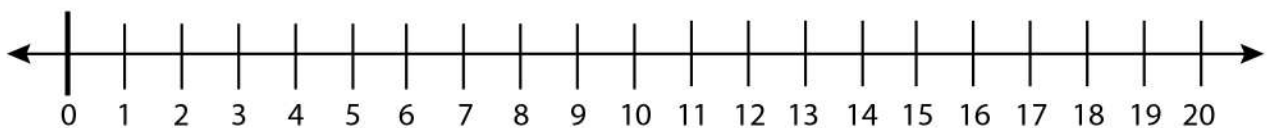
Find 15 on the number line and circle it.



Find 19 on the number line and circle it.



Find 20 on the number line and circle it.



Find 8 on the number line and circle it.

