

Name: \_\_\_\_\_

Date: \_\_\_\_\_

# Adding Two Negative Numbers Using Number Lines

1.  $(-3)+(-7)=?$



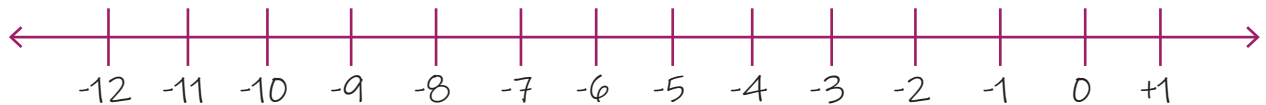
2.  $(-3)+(-3)=?$



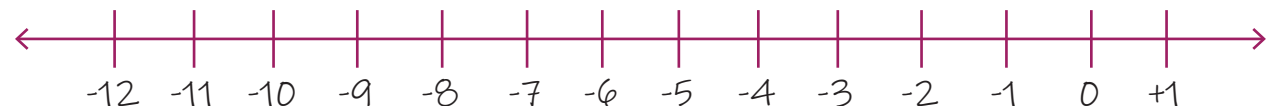
3.  $(-2)+(-1)=?$



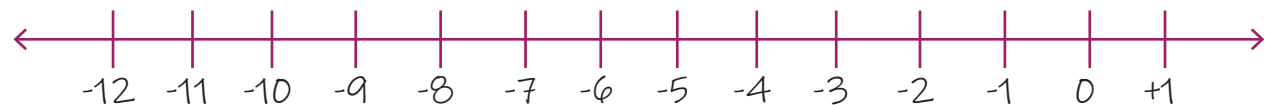
4.  $(-3)+(-4)=?$



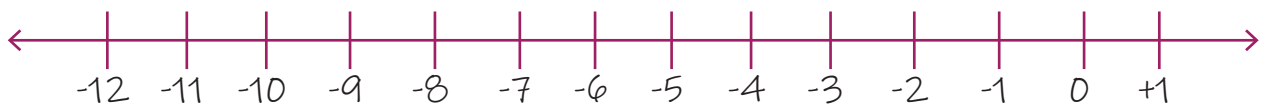
5.  $(-4)+(-6)=?$



6.  $(-6)+(-3)=?$



7.  $(-5)+(-6)=?$



8.  $(-3)+(-2)=?$

